

## Year 2 Maths Home Learning – week beginning 29th June

Hello Everyone,

I am soooooooooo excited to see you all on Wednesday morning for some school fun, chats, catch-ups and laughs! We're not joking when we say we've missed you so much and can't wait to see your lovely faces.

With this in mind, I have planned 4 sessions this week for home learning as we'll be together on Wednesday so we can work on something different.

As last week, well done to those of you that are managing to get on to Sumdog and are collecting coins! Please email school if you need support or have mislaid your Sumdog password and username. It is easy to log in and get going – and all learning is at your level and pace.


This week the White Rose Home Learning is all about Mass





The worksheets are in the Year 2 folder as usual.

Arithmetic or Problem Solving for the starter questions this week. Use the strategies you know to work them out.

Have a wonderful week 😊

Love  
Mrs Halfacree

	<u>Starter Task</u>	<u>Main Task</u>
<u>Monday</u>	<p>. Here are 41 balls: 24 rugby balls and 17 footballs.</p>  <p>Complete the addition and subtraction calculations below.</p> $\square + \square = 41$ $\square - \square = 17$	<p>Use the White Rose Day 1 presentation and tasks</p> <p><b>Measure Mass in grams</b></p>

<p><u>Tuesday</u></p>	<p>Circle the odd numbers.</p> <p>13      54      26      55      72</p> <p>87      91</p> <p>.Circle the longer time interval.</p> <p>1 hour      65 minutes</p>	<p>Use the White Rose Day 2 presentation and tasks</p> <p>Measure Mass in kilograms</p>
<p><u>Wednesday</u></p>	<p><u>School Morning at St Blaise Centre!</u></p> <p><b>WOO HOO!</b></p> 	
<p><u>Thursday</u></p>	<p>Match the name of the 3D shape to the correct shape.</p> <p>Pyramid</p> <p>Cylinder</p> <p>Cube</p>    <p>Are these correct? If not, can you make them right?</p> <p><math>11 + 4 = 20</math></p> <p><math>20 - 15 = 9</math></p> <p><math>13 + 7 = 20</math></p>	<p>Use the White Rose Day 3 presentation and tasks</p> <p>Compare volume</p>

Friday

Janice has 9 small dolls. There are 15 in a full set.



How many more dolls does she need to complete her set of 15 dolls?

Use the White  
Rose Day 4  
presentation and  
tasks

Millilitres